



Ekvationer med obekanta i båda leden

Lös ekvationerna.


1 a) $2x + 7 = x + 11$



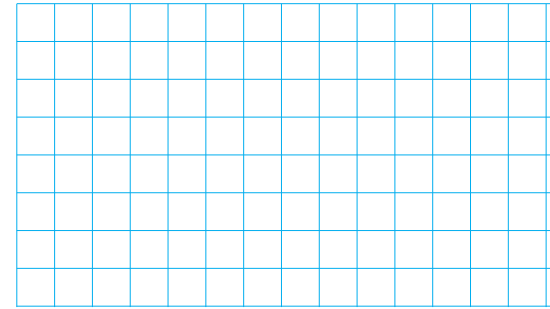
b) $4y - 1 = 2y + 11$




2 a) $z + 7 = 5z - 9$




b) $6x + 1 = x + 26$




3 a) $2y - 1 = 5y - 19$




b) $4z + 7 = z + 22$



4 a) $5x - 2 = 2x + 19$



b) $8y - 2 = 10y - 22$



Ekvationer med obekanta i båda leden**FACIT**

- 1 a) $x = 4$
b) $y = 6$
- 2 a) $z = 4$
b) $x = 5$
- 3 a) $y = 6$
b) $z = 5$
- 4 a) $x = 7$
b) $y = 10$