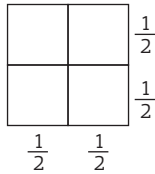


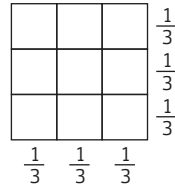
Multiplikation av tal i bråkform (I)

Gör beräkningarna. Ta hjälp av figurerna.

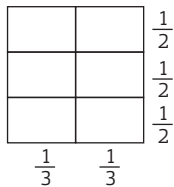
1 a) $\frac{1}{2} \cdot \frac{1}{2} = \text{—————} = \text{—}$



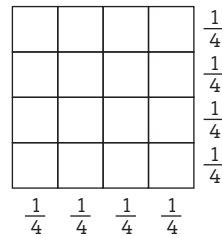
b) $\frac{1}{3} \cdot \frac{1}{3} = \text{—————} = \text{—}$



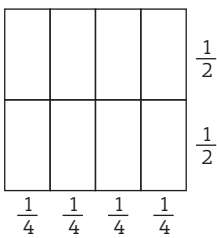
2 a) $\frac{1}{2} \cdot \frac{1}{3} = \text{—————} = \text{—}$



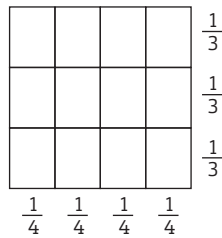
b) $\frac{1}{4} \cdot \frac{1}{4} = \text{—————} = \text{—}$



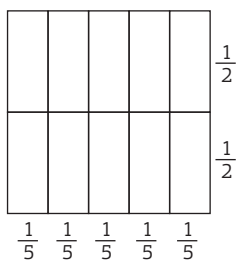
3 a) $\frac{1}{4} \cdot \frac{1}{2} = \text{—————} = \text{—}$



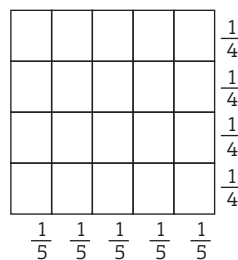
b) $\frac{1}{3} \cdot \frac{1}{4} = \text{—————} = \text{—}$



4 a) $\frac{1}{2} \cdot \frac{1}{5} = \text{—————} = \text{—}$



b) $\frac{1}{4} \cdot \frac{1}{5} = \text{—————} = \text{—}$



Multiplikation av tal i bråkform (I)**FACIT**

1 a) $\frac{1}{4}$

b) $\frac{1}{9}$

2 a) $\frac{1}{6}$

b) $\frac{1}{16}$

3 a) $\frac{1}{8}$

b) $\frac{1}{12}$

4 a) $\frac{1}{10}$

b) $\frac{1}{20}$