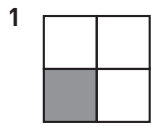


Hur stor andel? (I)

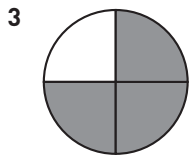
Hur stor andel är skuggad? Svara i bråkform och decimalform.



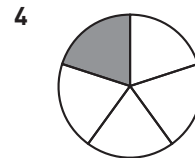
_____ = _____



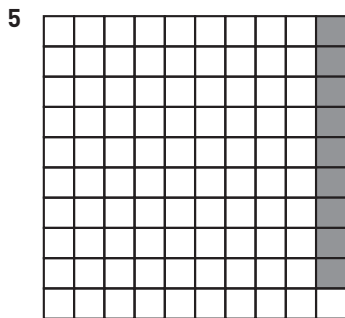
_____ = _____



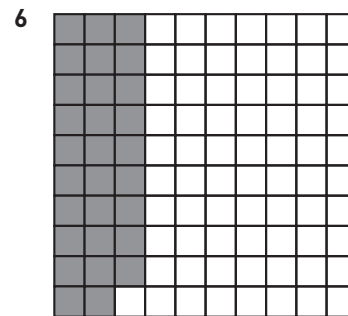
_____ = _____



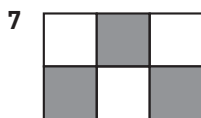
_____ = _____



_____ = _____



_____ = _____



_____ = _____



_____ = _____



_____ = _____



_____ = _____

Hur stor andel? (I)

FACIT

1 $\frac{1}{4} = 0,25$

2 $\frac{3}{10} = 0,3$

3 $\frac{3}{4} = 0,75$

4 $\frac{1}{5} = 0,2$

5 $\frac{9}{100} = 0,09$

6 $\frac{29}{100} = 0,29$

7 $\frac{1}{2} = 0,5$

8 $\frac{4}{5} = 0,8$

9 $\frac{2}{5} = 0,4$

10 $\frac{7}{10} = 0,7$