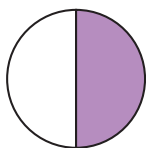


Hur stor andel? (II)

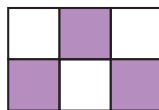
Hur stor andel är skuggad? Svara i bråkform, decimalform och procentform.

1



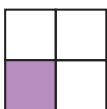
___ = ___ = ___

6



___ = ___ = ___

2



___ = ___ = ___

7



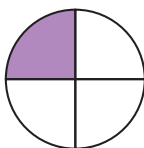
___ = ___ = ___

3



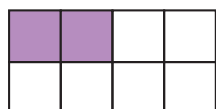
___ = ___ = ___

8



___ = ___ = ___

4



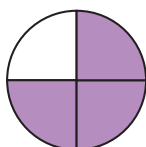
___ = ___ = ___

9




___ = ___ = ___

5



___ = ___ = ___

10



___ = ___ = ___

Hur stor andel? (II)

FACIT

1 $\frac{1}{2} = 0,5 = 50 \%$

2 $\frac{1}{4} = 0,25 = 25 \%$

3 $\frac{1}{5} = 0,2 = 20 \%$

4 $\frac{1}{4} = 0,25 = 25 \%$

5 $\frac{3}{4} = 0,75 = 75 \%$

6 $\frac{1}{2} = 0,5 = 50 \%$

7 $\frac{2}{5} = 0,4 = 40 \%$

8 $\frac{1}{4} = 0,25 = 25 \%$

9 $\frac{4}{5} = 0,8 = 80 \%$

10 $1 = 1 = 100 \%$