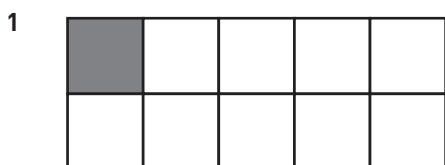
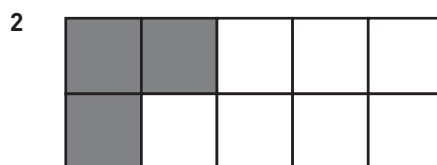


## Bråkform och decimalform (I)

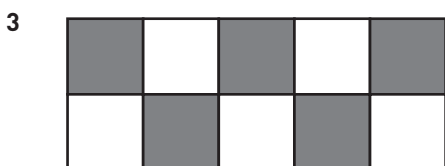
Hur stor andel är skuggad? Svara i både bråkform och decimalform.




$$\frac{\quad}{\quad} = \frac{\quad}{\quad}$$




$$\frac{\quad}{\quad} = \frac{\quad}{\quad}$$



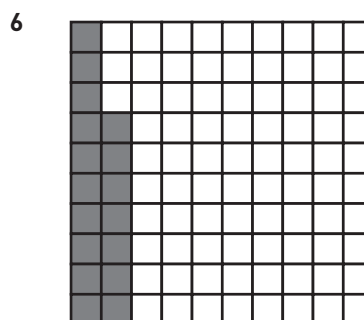
$$\frac{\quad}{\quad} = \frac{\quad}{\quad}$$




$$\frac{\quad}{\quad} = \frac{\quad}{\quad}$$




$$\frac{\quad}{\quad} = \frac{\quad}{\quad}$$



$$\frac{\quad}{\quad} = \frac{\quad}{\quad}$$



$$\frac{\quad}{\quad} = \frac{\quad}{\quad}$$



$$\frac{\quad}{\quad} = \frac{\quad}{\quad}$$

## Bråkform och decimalform (I)

**FACIT**

$$1 \quad \frac{1}{10} = 0,1$$

$$2 \quad \frac{3}{10} = 0,3$$

$$3 \quad \frac{5}{10} = 0,5$$

$$4 \quad \frac{9}{10} = 0,9$$

$$5 \quad \frac{7}{100} = 0,07$$

$$6 \quad \frac{17}{100} = 0,17$$

$$7 \quad \frac{35}{100} = 0,35$$

$$8 \quad \frac{3}{100} = 0,03$$