



Hur mycket är klockan (I)

Skriv två klockslag till varje bild.


1




2




3




4




5




6




7




8



9



10



Hur mycket är klockan (I)

FACIT

- 1 3.10 15.10
- 2 8.35 20.35
- 3 4.50 16.50
- 4 7.25 19.25
- 5 5.05 17.05
- 6 1.40 13.40
- 7 9.15 21.15
- 8 11.45 23.45
- 9 2.20 14.20
- 10 4.55 16.55